



11 +

Non-Verbal Reasoning

Practice Test 2


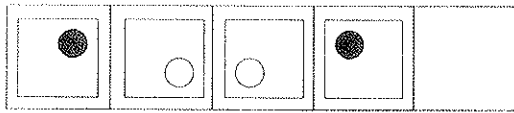
Instructions to Candidates:

1. Each section begins with a set of instructions and an example. Read through these, then answer the questions underneath.
2. Mark your answers on the answer sheet.
3. All questions are worth **one** mark, so don't spend too long on any single question.
4. If a question is too difficult, leave it and go on to the next one. Return to unanswered questions at the end of the test if you have time.
5. At the end of each page is an instruction telling you whether you may go on to the next page or not.

Section 1

Each of the questions below starts with a sequence of shapes on the left hand side. One part of the sequence is missing. Choose the missing shape from the boxes on the right hand side. Mark your answer on the answer sheet.

Look at the example below:

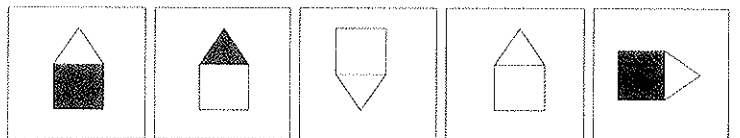
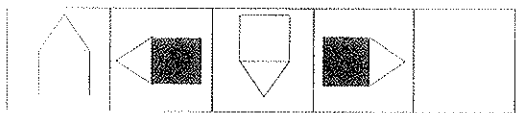


a. b. c. d. e.

Answer: b


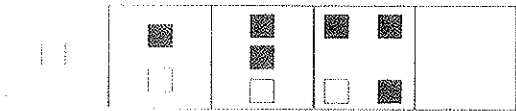
Now answer the questions in Section 1:

1.





a. b. c. d. e.

2.



a. b. c. d. e.

3.



a. b. c. d. e.

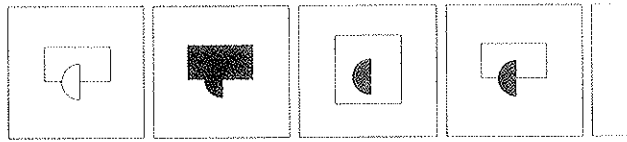

4.



a. b. c. d. e.

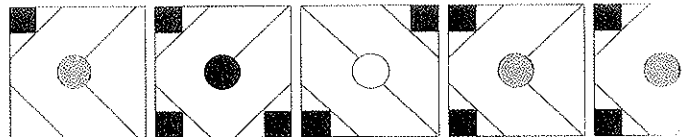
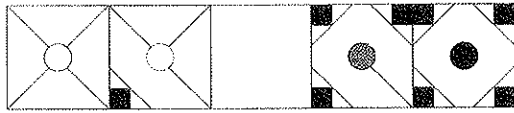
Section 1

11.



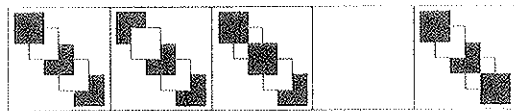
a. b. c. d. e.

12.




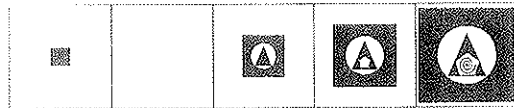
a. b. c. d. e.

13.



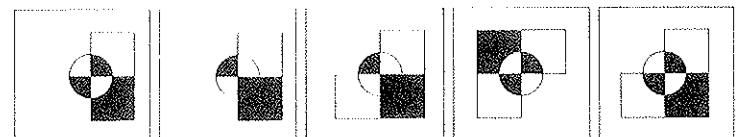
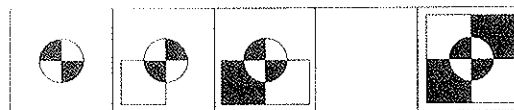
a. b. c. d. e.

14.





a. b. c. d. e.

15.



a. b. c. d. e.

16.



a. b. c. d. e.

Section 2

Only **one** of the five shapes in the boxes on the right can be rotated to face the same way as the shape on the left. The other four are mirror images of the shape on the left. Mark the answer sheet with the letter underneath the shape that can be rotated to face the same way.

Look at the example below:



a. b. c. d. e.

Answer: c

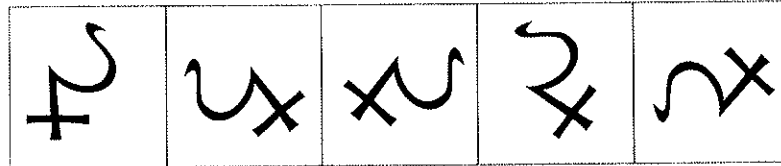
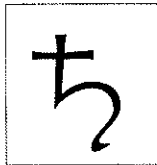
Now answer the questions in Section 2:

1.



a. b. c. d. e.

2.



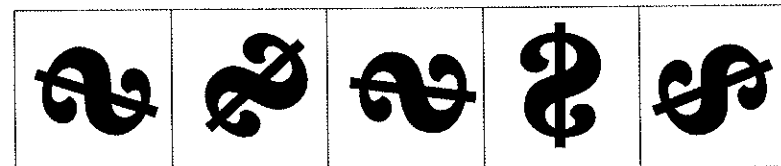
a. b. c. d. e.

3.



a. b. c. d. e.

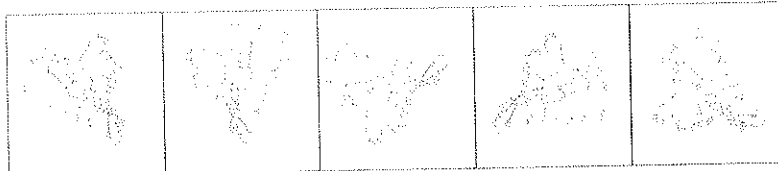
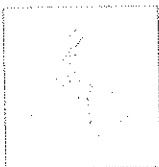
4.



a. b. c. d. e.

Section 2

5.



a. b. c. d. e.

6.





a. b. c. d. e.

7.



a. b. c. d. e.

8.



a. b. c. d. e.

9.



a. b. c. d. e.

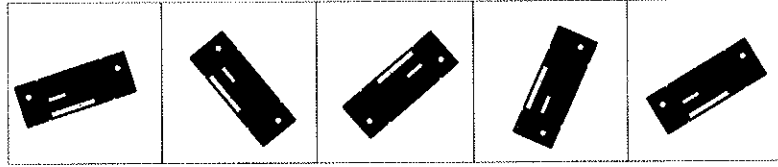

10.



a. b. c. d. e.

Section 2

11.



a.

b.

c.

d.

e.

12.



a.


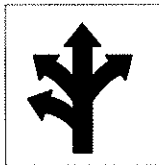
b.

c.

d.

e.

13.



a.



b.

c.

d.

e.

14.



a.

b.

c.

d.

e.

15.



a.



b.

c.

d.

e.

16.



a.

b.

c.


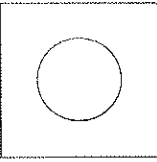

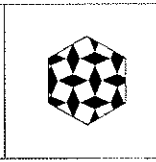
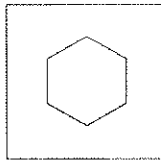
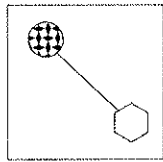
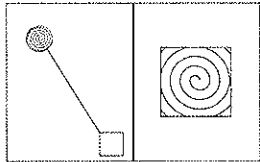
d.

e.

Section 3

The two images on the left hand side are related. Decide how they are related. Next you'll see a single box which contains an image. Choose which of the five on the right hand side needs to go with it so that they make a pair with the two on the left. Mark your answer sheet with the letter underneath the box containing the right answer.

Look at the example below:



a.

b.

c.

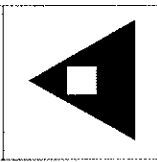
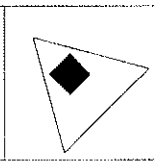
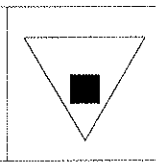
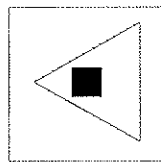
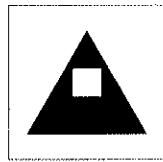
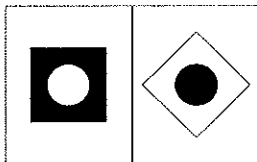
d.

e.

Answer: b

Now answer the questions in Section 3:

1.



a.

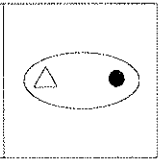
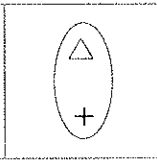
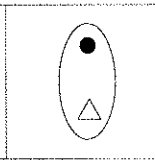
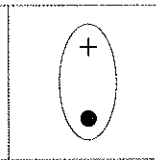
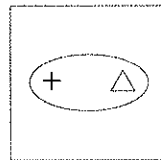
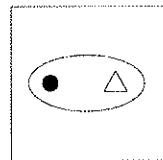
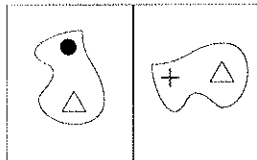
b.

c.

d.

e.

2.



a.


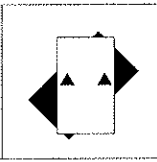
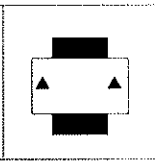
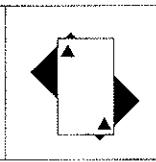
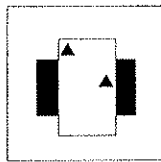
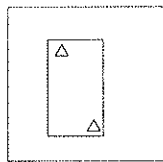
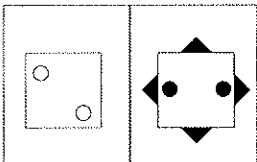
b.

c.

d.

e.

3.



a.

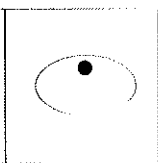
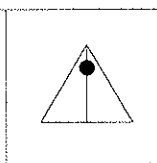
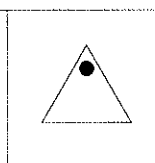
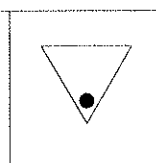
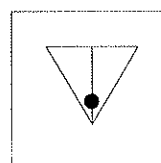
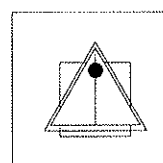
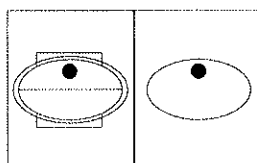
b.

c.

d.

e.

4.



a.

b.

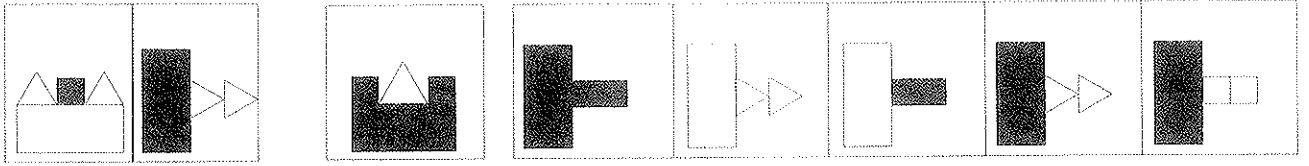
c.

d.

e.

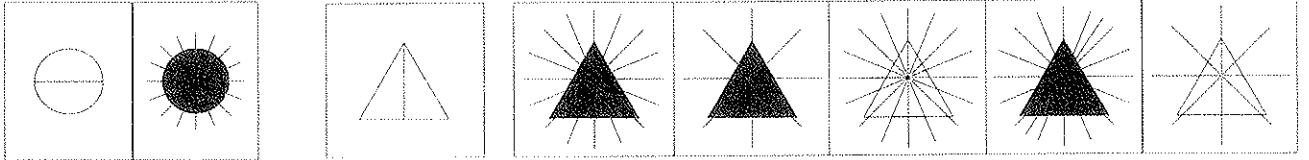
Section 3

5.



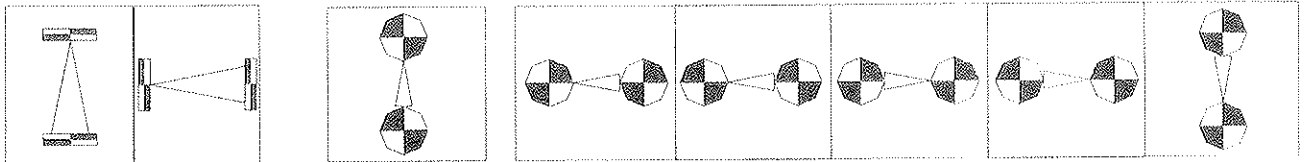
a. b. c. d. e.

6.



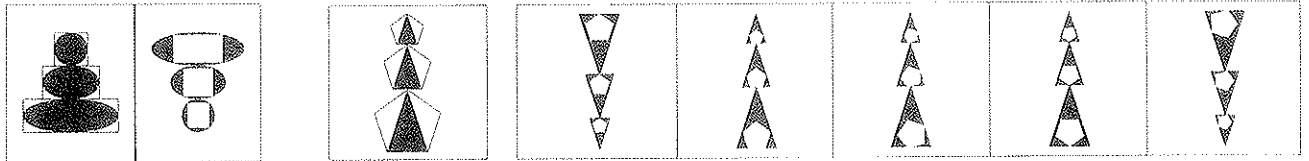
a. b. c. d. e.

7.



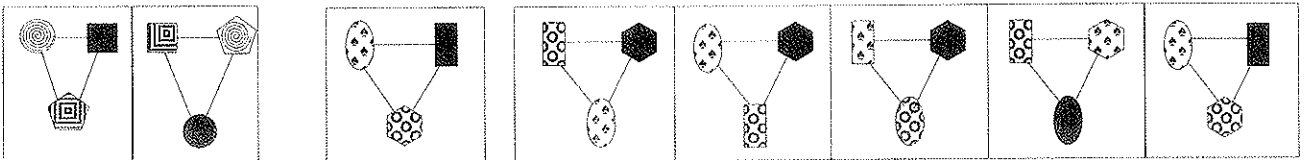
a. b. c. d. e.

8.



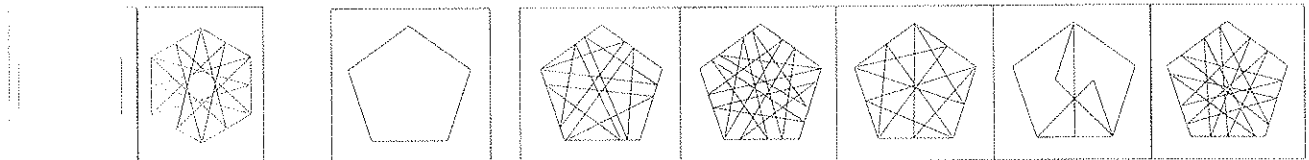
a. b. c. d. e.

9.



a. b. c. d. e.

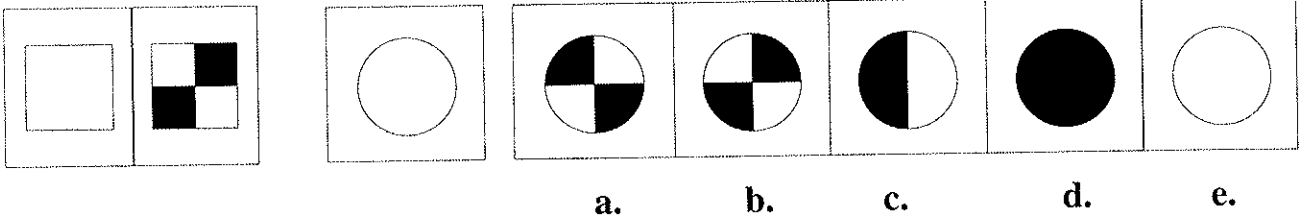
10.



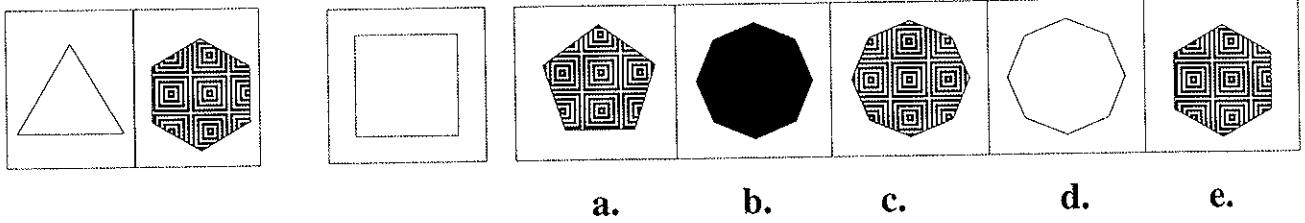
a. b. c. d. e.

Section 3

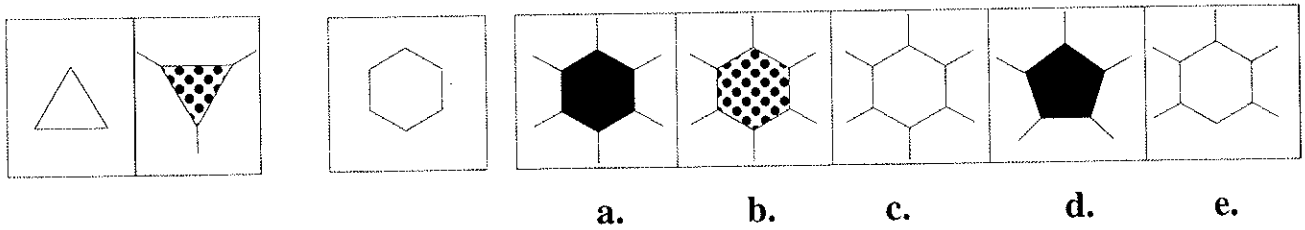
11.



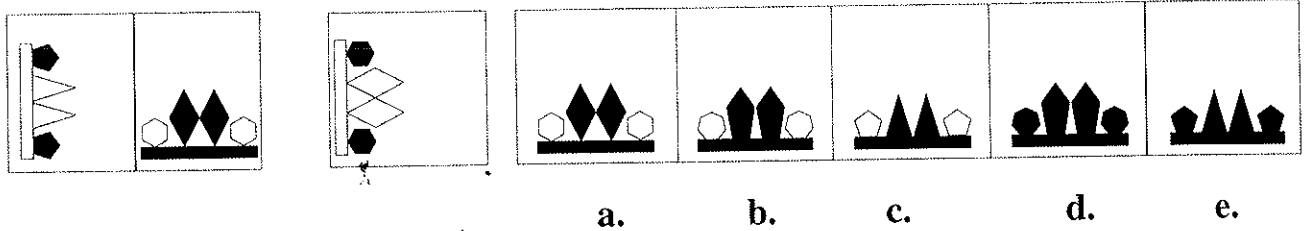
12.



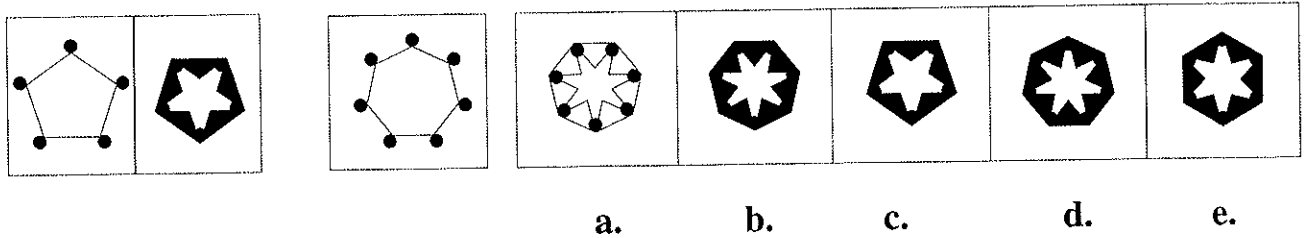
13.



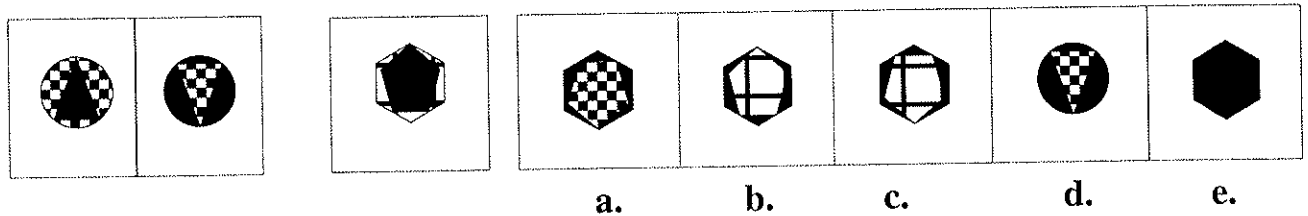
14.



15.












16.



Section 4









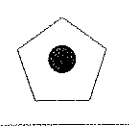
The shapes on the left hand side have codes which go with them. You have to decide how the codes describe the shapes. Then decide which of the five codes on the right hand side describes the shape on its own in the middle of the page. Mark your answer sheet with the letter underneath the box with the correct code.

Look at the example below:








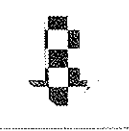
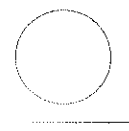
	AQ						
	BP		a.	b.	c.	d.	e.
	BQ		Answer: a				

Now answer the questions in Section 4:

1.

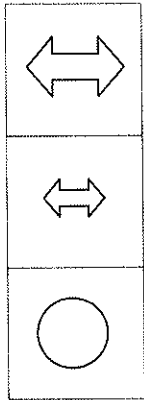
	KJ						
	ZT		a.	b.	c.	d.	e.
	KR						

2.

	AH						
	BH		a.	b.	c.	d.	e.
	CQ						

Section 4






3.



PX

PS

LX



a.


b.

c.

d.

e.

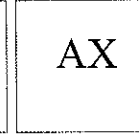

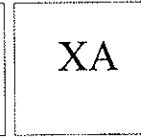
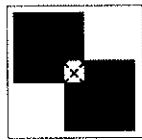
4.



AZ

BX

AX



a.

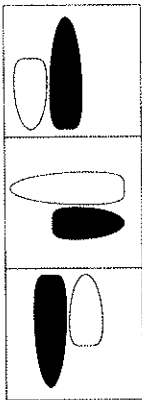
b.

c.

d.

e.




5.



AF

BG

CF



a.

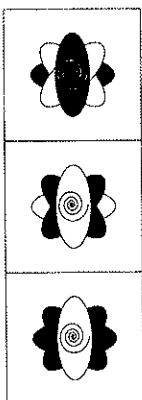
b.

c.

d.

e.




6.



HDS

GCT

HCT



a.

b.

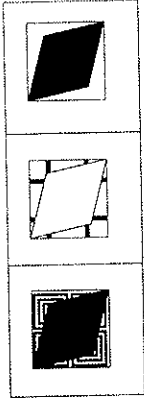
c.

d.

e.

Section 4


7.



ZA

YB

ZC



ZC

YA

ZB

ZY

YC

a.


b.

c.

d.

e.

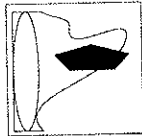
8.



LZP

MXQ

MZQ



MZQ

LZP

LXP

MZP

LXQ

a.

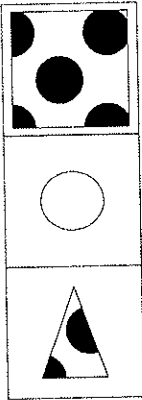
b.

c.

d.

e.

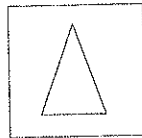
9.



WD

XC

WB



WC

XD

WX

WD

XB

a.


b.

c.

d.

e.


10.



ADFJ

BCGH

ADGH



BCFJ

BDGJ

ACGH

ADFH

BDFH

a.

b.

c.

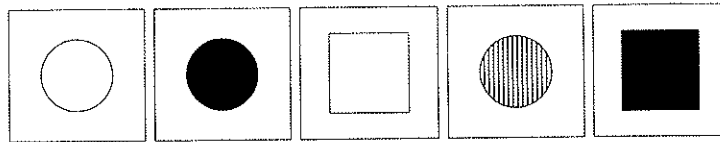

d.

e.

Section 5

There are four squares containing shapes on the left hand side. One square is blank. Decide which of the shapes on the right should fill the blank. Mark your answer sheet with the letter underneath the correct box.

Look at the example below:



a.

b.

c.

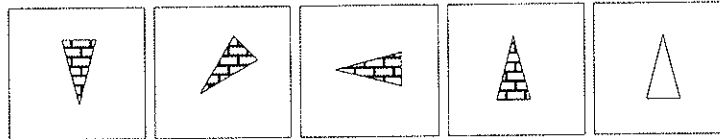
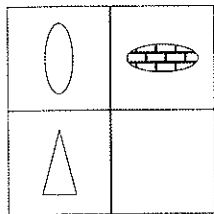
d.

e.

Answer: a

Now answer the questions in Section 5:

1.



a.


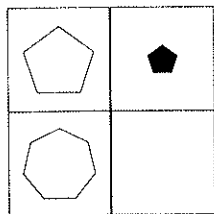
b.

c.

d.

e.

2.



a.

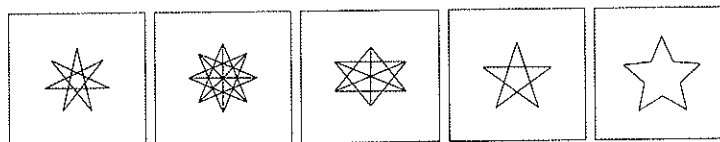
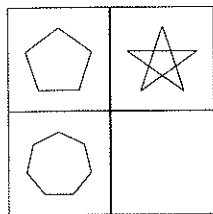
b.

c.

d.

e.

3.



a.


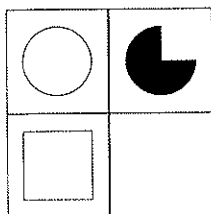
b.

c.

d.

e.

4.



a.

b.

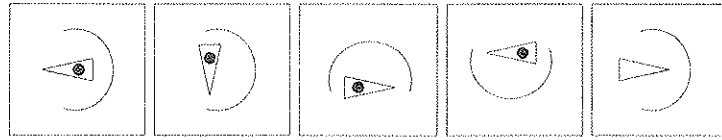
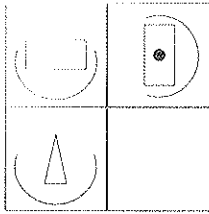
c.

d.

e.


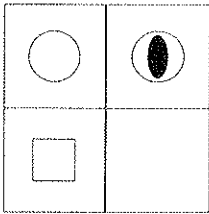
Section 5

5.



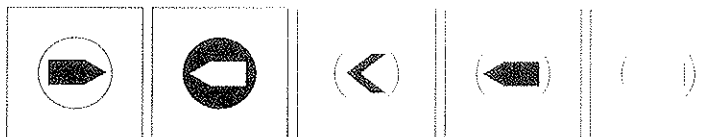
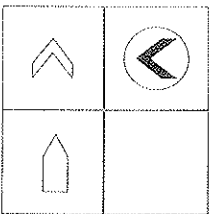
a. b. c. d. e.

6.





a. b. c. d. e.

7.



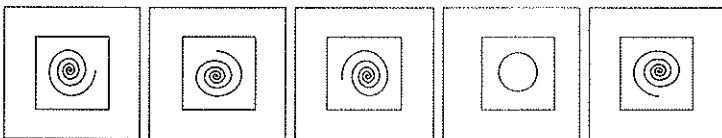
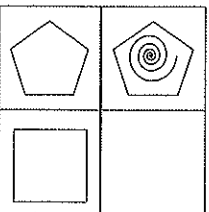
a. b. c. d. e.

8.



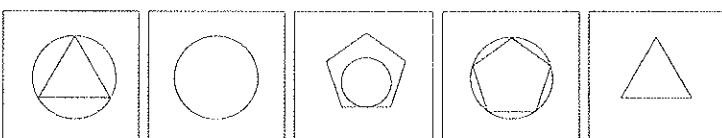
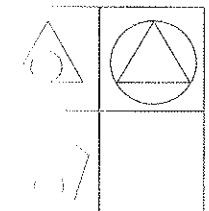
a. b. c. d. e.

9.



a. b. c. d. e.



10.



a. b. c. d. e.

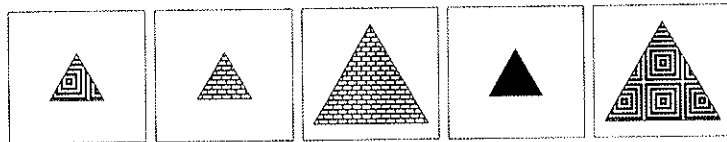

Section 5

11.



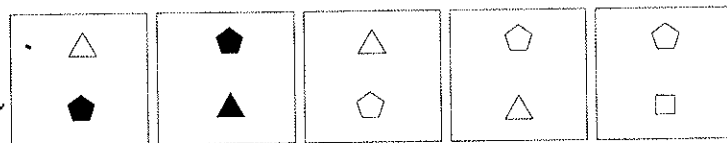

a. b. c. d. e.

12.





a. b. c. d. e.

13.



a. b. c. d. e.

14.



a. b. c. d. e.